

Section 2: Design Aptitude Test (DAT)

The second step of the ISDI Challenge is the Online Design Aptitude Test. The multiple choice examination evaluates your aptitude and knowledge related to design. This section of the ISDI challenge will be divided into 4 Parts:

Part 1. General Awareness - 15 questions ; 30 marks

Part 2. Logical Reasoning - 15 questions ; 30 marks

Part 3. Analytical Thinking- 10 questions ; 20 marks

Part 4. Storytelling - 1 question ; 20 marks

Total Time Allotted for this Section: 60 Mins

- This challenge requires you to attempt all questions.
- There is no negative marking
- This section must be completed uninterrupted, within the stipulated time, to proceed to the next section.

1 General Awareness

1. These tiles are better used for



- Bathroom
- Lounge
- Pavement
- Road

2. Which of the following animals is not depicted in Ashoka Pillar?

- Bull
- Horse
- Lion
- Tiger

2 Logical Reasoning

1. 6 friends are sitting in a circle and facing the center of the circle. Deepa is between Prakash and Pankaj. Priti is between Mukesh and Lalit. Prakash and Mukesh are opposite to each other. Who is sitting right to Prakash?



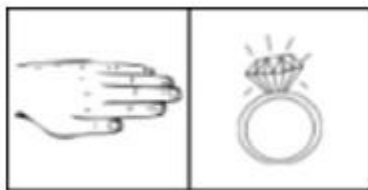
- Mukesh
- Priti
- Pankaj
- Lalit

2. All fish are tortoise. No tortoise is a crocodile. Conclusions: (i) No crocodile is a fish. (ii) No fish is a crocodile.

- Only conclusion I follows
- Only conclusion II follows
- Either I or II follows
- Neither I nor II follows
- Both I and II follow

3 Analytical Thinking

1. Fill The Question mark box.



- A
- B
- C
- D

2. Find the number of triangles in the given figure.



- 8
- 10
- 12
- 14

4 Storytelling

1. Assess the following photograph. Do you find anything interesting that will build up a small narrative? Tell your story within 15 sentences

